


*This quiz is worth 10 points, and you have 10 minutes to complete it.*


**Calculators are NOT allowed today.**

1. (10 pts) Sketch quick graphs of each of the following on the axes provided.


$$f(x) = 2 - x^{-3}$$




$$f(x) = x^{\frac{5}{2}}$$



$$f(x) = -x^{\frac{4}{5}}$$



$$f(x) = -\sqrt[7]{x^3}$$



$$f(x) = x^{-\frac{1}{3}}$$

